

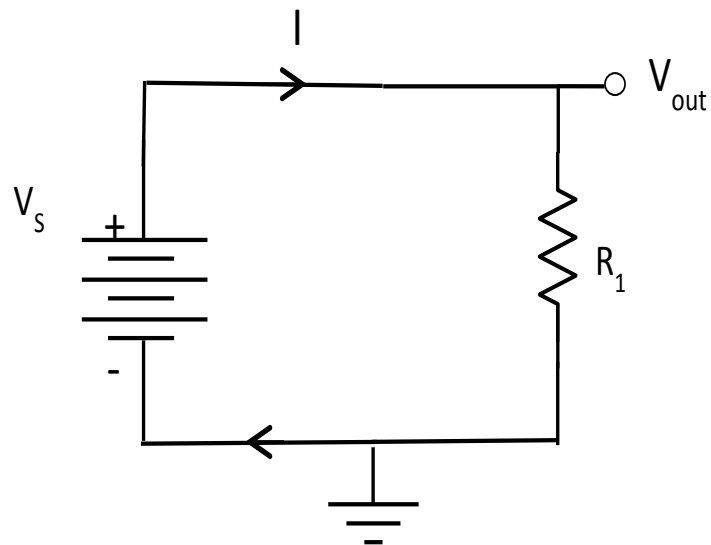
Fall 2016 – CS2420
Homework 2
Due Date : September 21st , 2016

1)

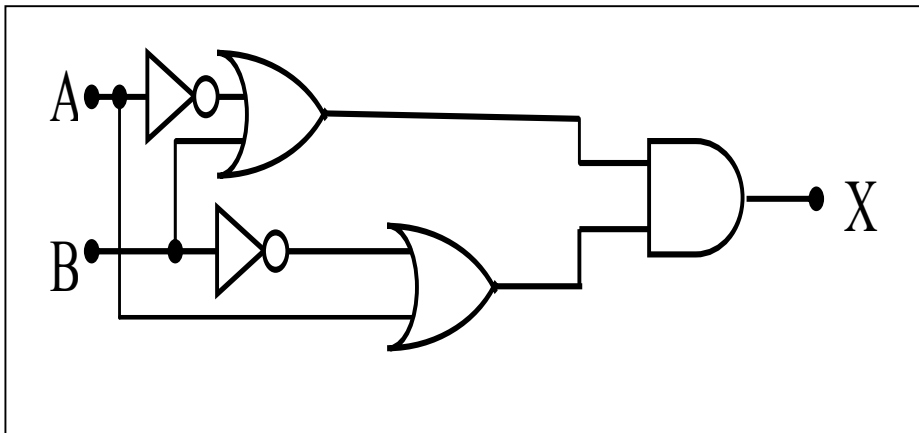
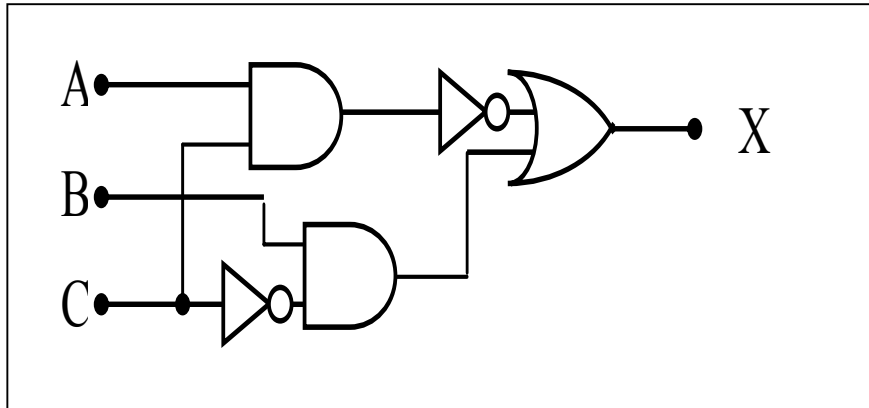
In the circuit below:

| | |
|----------------------|-------------------|
| $V_s = 10 \text{ V}$ | $R_1 = 20 \Omega$ |
|----------------------|-------------------|

What is the current, I , through the circuit? What is the voltage, V_{out} ? (10 pt).



2) Construct the Boolean expression and the truth table for each of the following logic diagrams (20 pts)



3) Construct a logic diagram and a truth table for each of the following Boolean Expressions (20 pts)

$$F = ((Y \text{ and } X) \text{ or } (Z' \text{ xor } y)')' \text{ and } (X \text{ or } X')$$

$$P = (A' + B)(A + B + C) C'$$

Remarks :

- The homework does not have to be typed, however, it must be written using **pencils** only. Include the following information on the top left hand side of the first page :-
 - Your Name :
 - Your Major :
 - Your Roster or Serial Number :
 - Homework Number : 2
 - Due Date : September 21st , 2016
- **Make sure that you write the question first then followed by your answer.**
- The homework must also be uploaded using homework upload no later than the end of class time on the due date. Use the following name format for your file name
 - LastName_FirstName_CS2420-A2.zip or**
 - LastName_FirstName_CS2420-A2.pdf or**
 - LastName_FirstName_CS2420-A2.doc**
- Must **show** all your work.
- **Missing ANY of the above items from your assignment will result in deducting 30% of the assignment grade. NO EXCEPTIONS.**
- Turn in hard copy of your assignment no later than the end of class time on the due date. The hard copy must be **stapled**. **No Late assignment will be accepted and a grade zero will be assigned.**
- **Copying the assignment from others will result in grade ZERO.**